

**BHAI JOGA SINGH PUBLIC
SCHOOL**



**HOLIDAY HOMEWORK
CLASS - V**

NAME _____

ROLL NO. _____

ENGLISH

1. Write a paragraph of 150 words or 15-20 lines on the following topics:- (any 4)
 - My Plans For Summer Vacation • A Hot Summer Day • How To Stay Healthy • My Favourite Television Programme • A Visit To A Historical Place.
2. Read the newspaper regularly during holidays you may utilise your noon time for this activity when you are at home. Cut five pictures per week from old newspapers, paste them in a scrap file and give a catchy caption to each picture.
3. Design Magazine on “**Lakshadweep Island**” which should have the following requirements:-
 - Design an attractive Cover Page.
 - Give a creative name to a magazine.
 - Major attractions of Lakshadweep Island
 - Places to visit
 - Famous Cuisine of Lakshadweep Island
4. Everyone has a role model for people they look up to in their life. For example, for me that is My Father. Write a paragraph and paste the picture of that person on an A4 size pastel sheet.
5. Make a beautiful chart on
 - ‘Phrases’
 - ‘Tenses’
6. Our school is our second home. We must keep our school clean. So write and draw any 10 rules that you follow to keep your school clean and hygienic on an A3 size sheet.
7. Read novels - "Canterville Ghost" and "The magic of the Lost Temple". Write two pages about it.
8. Do Writing from pg. no 111-121 (English compacta)
9. Do exercise from pg no. 130-143 (English compacta)
10. Learn all the work done in the months of April and May.

HINDI

1. धरती पर पशु पक्षियों की अहम भूमिका है और उनका संरक्षण हमारा कर्तव्य है पक्षियों के संरक्षण हेतु समाज को जागरूक करते हुए विलुप्त होते हुए पक्षी गौरैया विषय पर एक प्रभावशाली विज्ञापन तैयार कीजिए
2. लक्षद्वीप के बारे में चित्र चिपकाकर प्रोजेक्ट बनाओ तथा उसके प्रमुख स्थानों के बारे में लिखिए। (A4 sheet)
3. गर्मी की छुट्टियों के किन्हीं 20 दिनों की दिनचर्या एक डायरी बनाकर लिखिए।
4. कोई भी दो रोचक कहानी लिखकर उनके चित्र बनाओ
5. पाठ्य पुस्तक में से प्रतिदिन पाँच कठिन शब्दों को लिखकर एक डायरी बनाओ
6. प्रतिदिन समाचार पत्र पढ़िए और पाँच मुख्य समाचार प्रतिदिन लिखिए।
7. संज्ञा शब्दों पर आधारित एक सुंदर चार्ट तैयार करिए।
8. प्रकृति हमें बहुत कुछ देती है उन वस्तुओं को बनाकर एक फाइल तैयार करिए।

9. हिंदी व्याकरण में अभ्यास पेज 21,22,23,34,35 करो
10. अभ्यास पुस्तिका में पेज 11 से 16 तक करें
11. प्रतिदिन एक सुंदर सुलेख अलग कॉपी में करें

MATHEMATICS

1. Make a chart of:
 - International number of Numeration. (Roll no. 1-15)
 - Make a chart on 'Types of Numbers' with their examples.(Roll no. 16-30)
2. A 10-12 year old child requires 1800-2200 calories per day. Make a diet plan for yourself according to the requirements. (Table given on the last page)
[Hint:- 1 Chapati = 110 calories, 1 bowl of rice = 180 calories, 1 cup milk = 70 calories, 1 cup ice-cream= 200 calories]
3. Write down the population of any Lakshadweep Island in the Indian and International System of Numeration.
4. Draw a bar graph for 5 states of India with high female literacy rate.
5. Learn and write table 2 to 30 and do the practice of Roman Numbers.(till 100)
6. Practice 5 sums each of all four operations $+$, $-$, \times , \div every week (the sums should be of class 5 level)
7. Make a shopping list with help of your mother and find out total expenses. (Table given on the last page)

SCIENCE

1. Make a chart on the importance of forest and what happens if we go on cutting trees and grass without limit.
2. Make a model on:
 - Solar eclipse (Roll no 1-10)
 - Lunar eclipse (Roll no 11-20)
 - Any two constellation (Roll no 21-30)
3. Make a poster on any one topic:-
 - Healthy Food
 - Safety rules in School
 - Road safety
4. Make a collage showing famous food items of Lakshadweep.
 - Locate it on the map of India.
 - Write a short note on "Why is it known as coral Island of India?"
5. Be your own Dietician.
Make a chart for 10 days. Write what you have for breakfast, lunch, dinner (including junk food) and also write down the nutrients present in that.
6. Do the given worksheets in a separate notebook. (Worksheets are given on the last page)

7. Learn the chapters done

SOCIAL SCIENCE

1. Make a model showing the two movements of the Earth.
2. Project Work
Make a project on lakshadweep taking into consideration the food and dress; festivals. celebrated and tourist spots.
3. Make a PowerPoint Presentation on any two types of Pollution mentioning the causes, damage caused and prevention.
4. On an outline map of the world mark all the continents and all the oceans.

COMPUTER

1. Read and Learn Chapter 1(also back exercise)and write the difficult words of Chapter 2 in a Computer notebook.
2. Make a chart of 4 Generation of Computers and create a presentation on Types of Computer (classification)eg:- Super , Mainframe, Mini & Micro.

SANSKRIT

1. निम्न विषय पर आधारित एक फाइल बनाओ -
 - पाँच फलों के नाम पाँच पक्षियों के नाम
 - पाँच शरीर के अंगों के नाम
 - पाँच पशुओं के नाम चित्र बनाकर संस्कृत में नाम लिखिए।
2. एक से दस तक गिनती संस्कृत में लिखकर संख्या के चित्र बनाओ ।
3. धातु रूप " पठ्, गम्, लिख,इस लट् लकार में लिखिए और याद करिए ।
4. प्रतिदिन पाँच वाक्य संस्कृत में लिखने का अभ्यास करिए ।

FRENCH

1. Révisez tout le travail complété jusqu'à maintenant. (Revise all the work done till now.)
2. Préparez une tenture murale ou un collage sur l'un des sujets suivants.
(Prepare a wall hanging or a collage (on A-3 size sheet on any one of the following topics.)
 - a. Le fromage français (Famous cheese of France.)
 - b. La cuisine fameuse de la France. (The famous food of France)
 - c. Les parfums français (The French perfumes)
 - d. Les monuments de la France. (The famous monuments of France.)

3. Écrivez les nombres de 1 à 50 en français de manière créative avec des images.
(Write numbers from 1-50 in French in a creative manner with pictures).

PUNJABI

1. 25 ਤਿੰਨ ਅੱਖਰੀ ਸ਼ਬਦ ਲਿਖੋ ।
2. 25 ਚਾਰ ਅੱਖਰੀ ਸ਼ਬਦ ਲਿਖੋ ।
3. ਨੂਰ ਪੰਜਾਬੀ_ਭਾਗ- 0 ਪੁਸਤਕ ਵਿਚ 13-55 ਅੰਕ ਤਕ ਸ਼ਬਦਜੋੜ ਤੇ ਚਿੱਤਰ ਮਿਲਾਨ ਕਰੋ ।
4. ਦਿੱਲੀ ਦੇ ਕੁਝ ਇਤਿਹਾਸਕ ਸਥਾਨ (Historical Place) ਦੇ ਚਿੱਤਰ ਲਗਾ ਕੇ ਉਨ੍ਹਾਂ ਦੇ ਨਾਂ ਲਿਖੋ ।
5. ਜਮਾਤ ਵਿਚ ਮਾਤਰਾਵਾਂ ਦੇ ਵਰਣਾਂ ਦਾ ਅਭਿਆਸ ਦੀ ਵਜ੍ਹਾ ਕਰਕੇ
6. ਪੰਨਾ ਮਾਤਰਾ ਦੇ 20 ਸ਼ਬਦ ਲਿਖੋ ।
7. ਸਿਹਾਰੀ ਮਾਤਰਾ ਦੇ 20 ਸ਼ਬਦ ਲਿਖੋ । ਦਿੱਲੀ ਦੇ ਇਤਿਹਾਸਕ ਗੁਰਦੁਆਰਿਆਂ ਦਾ ਚਾਰਟ ਬਣਾ ਕੇ ਉਨ੍ਹਾਂ ਤੇ ਕਿਸ ਗੁਰੂ ਨਾਲ ਸਬੰਧਤ ਹੈ ਵਰਣਨ ਕਰੋ ।
8. April ਤੋਂ May ਤਾਕਤ ਦੇ ਕੀਤੇ ਕੰਮ ਦੀ ਦੁਹਰਾਈ ਕਰੋ ।

GK

1. Spend some time with the night sky and try to find/observe different constellations (ursa major, orion the hunter, cassiopeia)/ venus/ sirius in the night sky and share your experience with your friends and family.
2. Watch stories from YouTube and write the moral.
• Toy Story (1995) • The lion King (1994) • Harry Potter and the sorcerer's stone (2001) • The Goonies (1985) • Mary Poppins (1964) • Frozen (2013)

ART & CRAFT

1. Make a Wall Hanging by using cutouts of Fruits (Roll No. 1-10)
2. Use your creativity & Make An A4 size Envelope by using a Handmade sheet. Decorate it also with decorative material.(Roll No.11-20)
3. Make a Wall Hanging by using cutouts of vegetables. (Roll No.21-30)
4. Draw a beautiful Rangoli in a drawing file and complete it with vegetable printing.
5. Do Page no. 6,7,8 & 9 in the book.

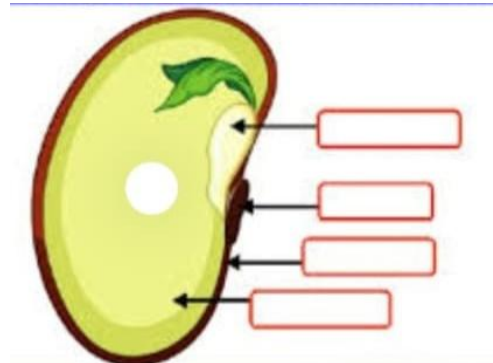
DIVINITY

1. Name the sons of Guru Nanak Dev Ji.
2. What was the earlier name of Guru Angad Dev Ji ?
3. Who gave the name Angad to Bhai Laihna ji ?
4. Why did Guru Nanak Dev Ji gave Guruship to Bhai Laihna ji?
5. Where did bhai Laihna ji used to go before coming to Guru Nanak Dev Ji?
6. Where did Bhai Laihna ji meet Guru Nanak Dev Ji ?
7. Revise chapter 1,2 and 3

**SCIENCE
WORKSHEET 1**

1. Drag and drop the parts of a bean seed

- Hilum
- Cotyledon
- Baby plant
- Seed coat



2. Match the seeds with their corresponding dispersal method.

Cotton	Water
Gorse	Wind
Coconut	Animal
Berries	Explosion

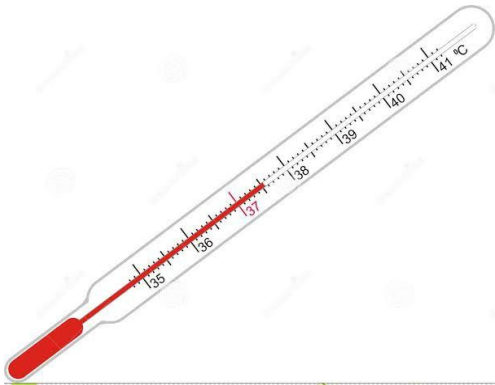
3. Answer in one word.

- a. The process in which a new plant grows from a seed _____
- b. A plant that has light and hairy seeds _____
- c. A plant whose seeds get dispersed by animals _____
- d. A plant that disperses its seeds by explosion _____

WORKSHEET 2

1. Choose the correct answer to name the measuring tools.







2. Drag the vocabulary word next to its description.

mass weight volume
graduate gram litre balance

- a. The amount of space an object takes up _____
- b. The metric unit for measuring mass _____
- c. A tool used to measure mass _____
- d. The metric unit for measuring volume _____
- e. A tool used to measure volume _____
- f. The amount of matter in an object _____
- g. The force of gravity acting on an object _____

WORKSHEET 3

1. Choose the correct options.

- A cloth sling can be used to prevent movements in case of
 - a) Burns
 - b) fractures
 - c) Animal bites
 - d) Poisoning
- Which of the following can cause fire
 - a) Electrical faults
 - b) Gas leaks
 - c) Both (a) & (b)
 - d) Fracture
- A paste of baking soda can be applied for
 - a) Sprains
 - b) Snake bites
 - c) Bee stings
 - d) Wasp stings
- clothes do not catch fire easily.
 - a) Cotton
 - b) Polyester
 - c) Nylon
 - d) Rayon
- Carelessness while handling burning. accidents. can cause fire
 - a) Match sticks
 - b) Candles
 - c) Fire crackers
 - d) All of these

2. Name the following.

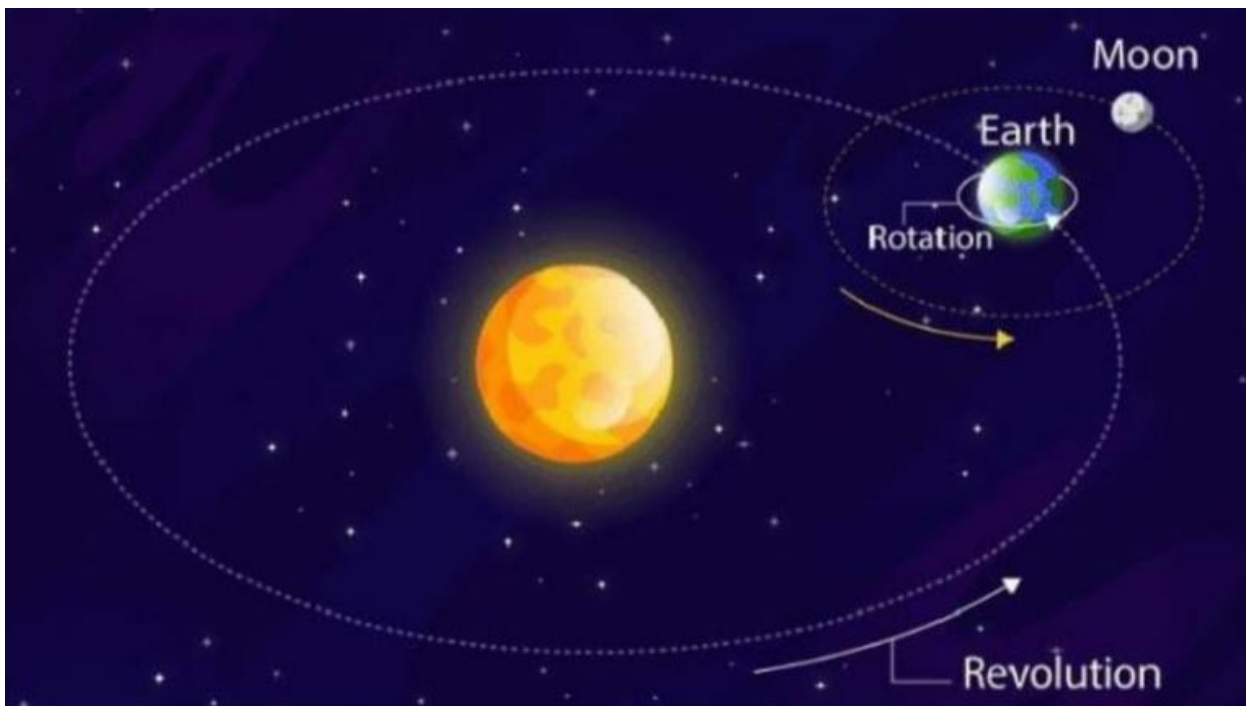
- a. Name two animals whose bite can cause rabies _____
- b. Immediate help given to an injured person _____
- c. A break or crack in the bone _____
- d. An injury by a sudden twisting of joints that causes swelling and pain _____
- e. A small bubble-like swelling on the skin filled with water _____

**SOCIAL SCIENCE
WORKSHEET**

A. Give one word for the following

1. The second largest continent - _____
2. World's largest desert - _____
3. Thickest forest in the world - _____
4. Continent surrounded by stormy seas - _____
5. Australia New Zealand and other island together are known as - _____
6. North America South America are joined by - _____
7. Northernmost point of the axis of the earth - _____
8. Southernmost point of the axis of the earth - _____
9. Fixed path on which the earth moves around the sun - _____

B. Read and write revolution or rotation



1. It takes 24 hours.- _____
2. It's the Earth orbiting the sun.- _____
3. It causes the seasons.- _____
4. It causes day and night.- _____
5. It's the Earth's movement on its own axis.- _____
6. It takes 365 days and 6 hours.- _____

C. Complete the table

SEASONS	NORTHERN HEMISPHERE	SOUTHERN HEMISPHERE
21st June	<input type="text"/>	Winter
<input type="text"/>	Autumn	<input type="text"/>
21st December	<input type="text"/>	Summer
21st March	Spring	<input type="text"/>

D. Circle the correct answers or fill in the blanks.

- In Diagram 7 the lines are
 - lines of longitude
 - lines of latitude
 - lines of latitude
- In Diagram 8 the lines are
 - lines of longitude
 - lines of latitude
 - lines of latitude
- In Diagram 7 the line representing 0° longitude is called the
- In Diagram 8 the line representing 0° latitude is called the
- Locate 0° longitude on Diagram. Write the words Prime Meridian on this line.
- Each of the lines of longitude on Diagram 7 extend from the Pole to _____ Pole
- The distance, in degrees, from the Prime Meridian to 90°E is
 - 10
 - 45
 - 75
 - 90 degrees.